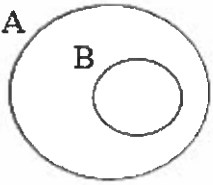


Raisonnement Logique Leçon 1

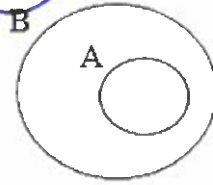
sous ensemble

1. **Choix Multiple** : Choisissez le diagramme qui représente $A \subset B$.

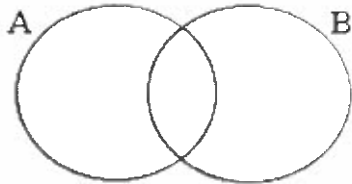
A.



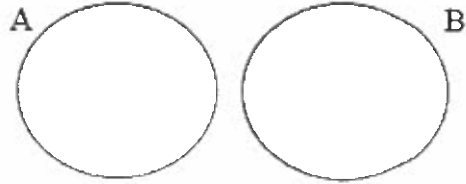
B.



C.

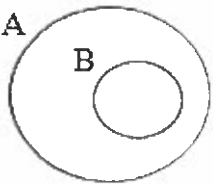


D.

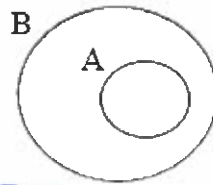


2. **Choix Multiple** : Choisissez le diagramme qui représente des ensembles disjoints.

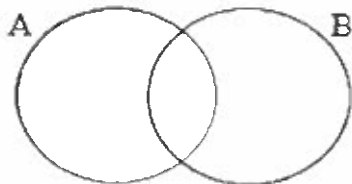
A.



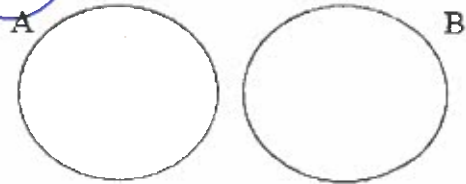
B.



C.

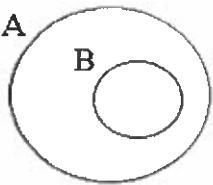


D.

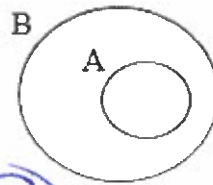


3. **Choix Multiple** : Choisissez le diagramme qui représente $A' = B$.

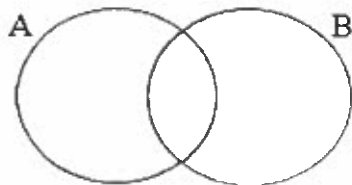
A.



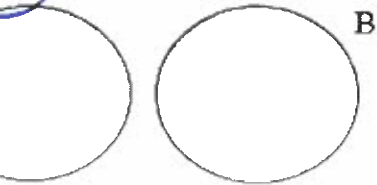
B.



C.



D.



complément