

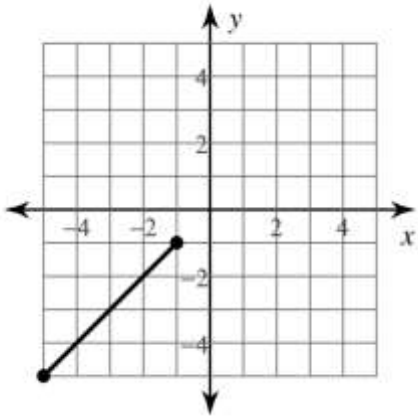
Mathématique Appliquée et Pré-Calcul 20S
Revue Point Milieu

Nom : _____

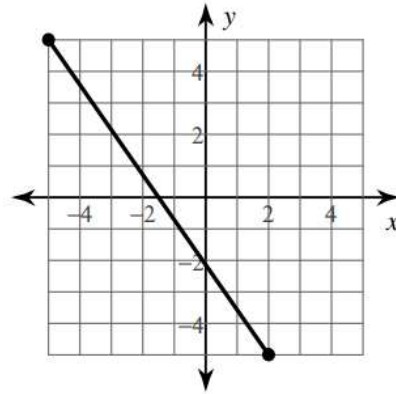
Date : _____

A) Détermine le point milieu de chaque segment.

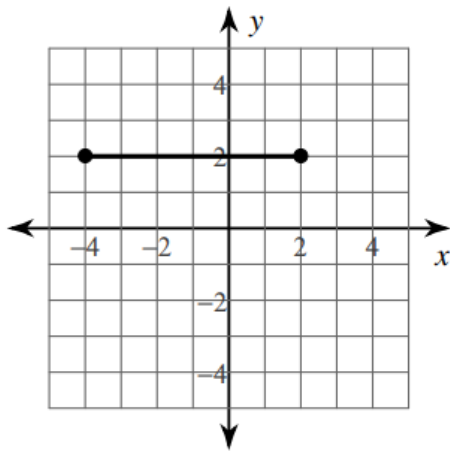
1)



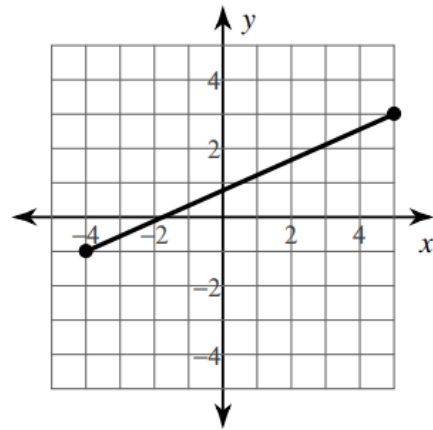
2)



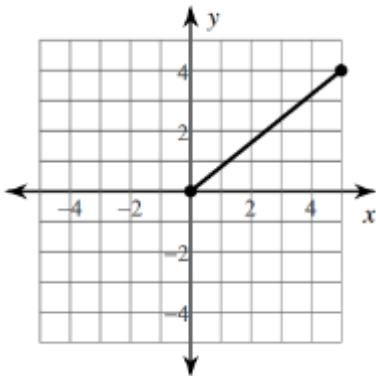
3)



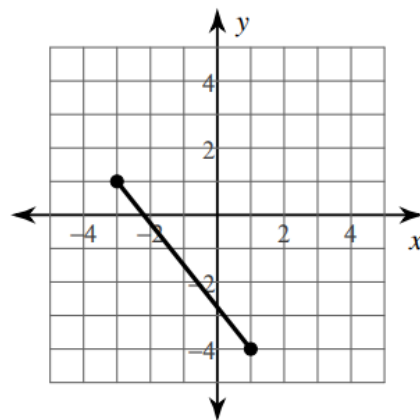
4)



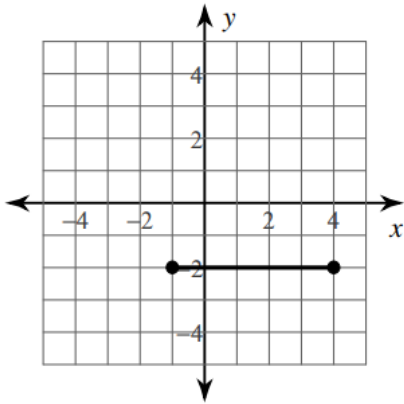
5)



6)



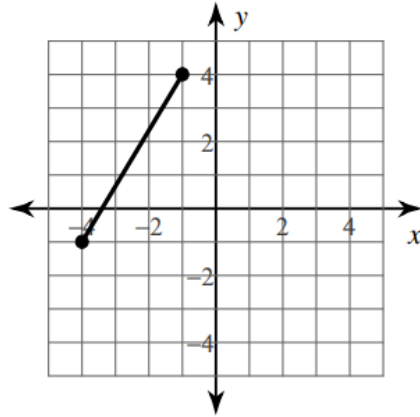
7)



B) Trouve le point milieu.

9) $(-4, 4), (5, -1)$

8)



10) $(-1, -6), (-6, 5)$

11) $(2, 4), (1, -3)$

12) $(-4, 4), (-2, 2)$

13) $(5, 2), (-4, -3)$

14) $(-1, 1), (5, -5)$

15) $(2, -1), (-6, 0)$

16) $(-3.1, -2.8), (-4.92, -3.3)$

17) $(-5.1, -2), (1.4, 1.7)$

18) $(4.9, -1.3), (-5.2, -0.6)$

19) $(5.1, 5.71), (6, 3.6)$

20) $(3.1, -2.1), (-0.52, -0.6)$