

Mathématique Appliquée et Pré-Calcul 20S
Revue Mesure et Trigonométrie

Nom : _____

Date : _____


1. Détermine le **périmètre** des figures suivantes ainsi que leur **aire**.

a)



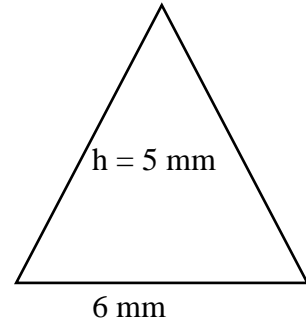
carré
 $l = 5 \text{ cm}$

b)



$r = 3 \text{ cm}$

c)

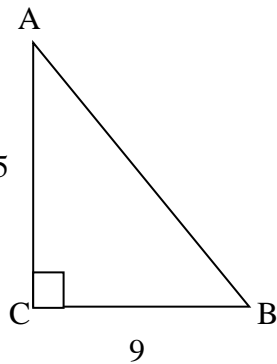


$h = 5 \text{ mm}$

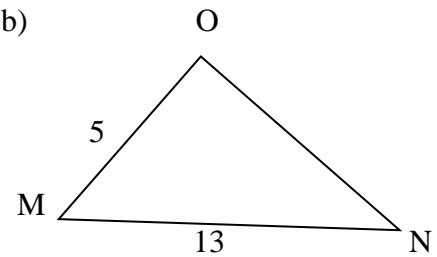
6 mm

2. Détermine les mesures de tous les côtés. $c^2 = a^2 + b^2$

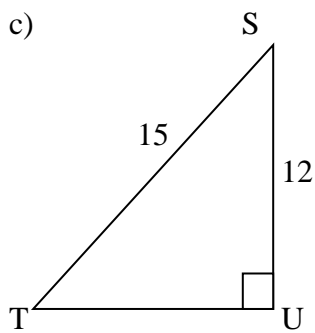
a)



b)

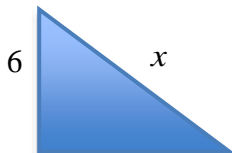


c)



3. Trouve la valeur de x :

a.



b.

