

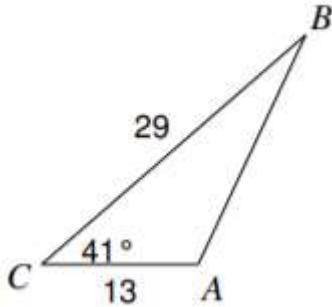
Mathématique Appliquée 30S  
Revue : Loi de sinus

Nom : \_\_\_\_\_

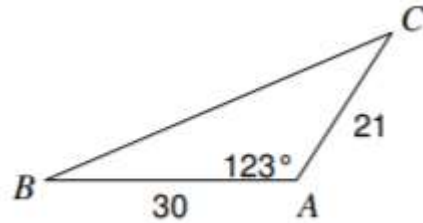
Date : \_\_\_\_\_

A) Détermine la mesure indiquée.

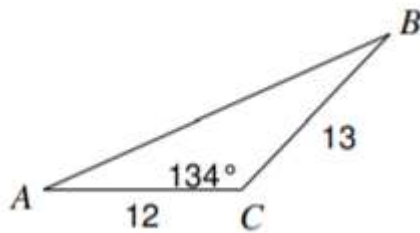
1) Trouve AB.



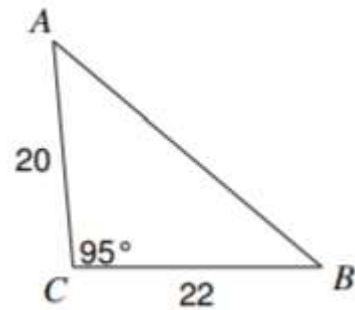
2) Trouve le côté a.



3) Trouve AB.



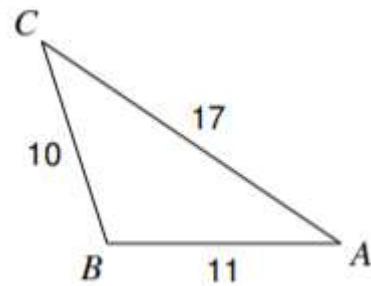
4) Trouve le côté c.



5) Trouve le plus grand angle.

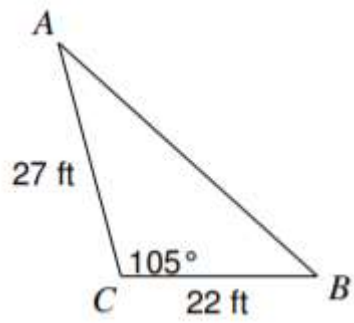


6) Trouve le plus petit angle.

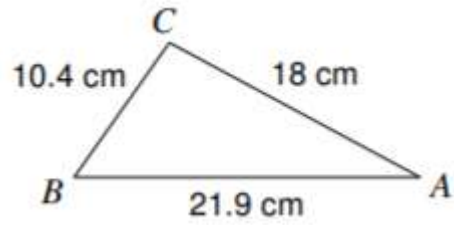


B) Résous les triangles et arrondis au dixième près.

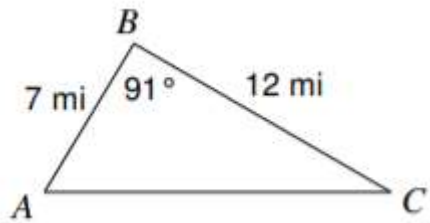
7)



8)



9)



10)

