

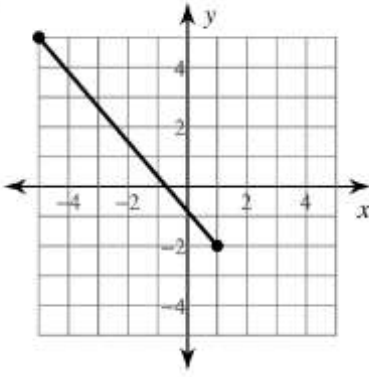
Mathématique Appliquée et Pré-Calcul 20S
Revue : Distance

Nom : _____

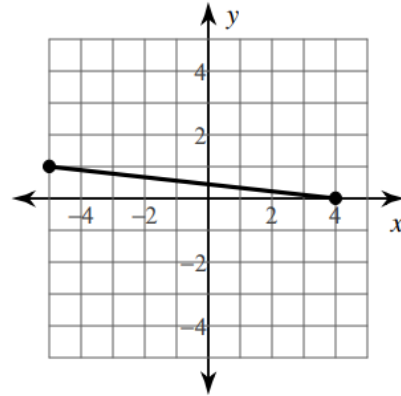
Date : _____

1) Trouve la distance entre les deux points. Arrondis au dixième près.

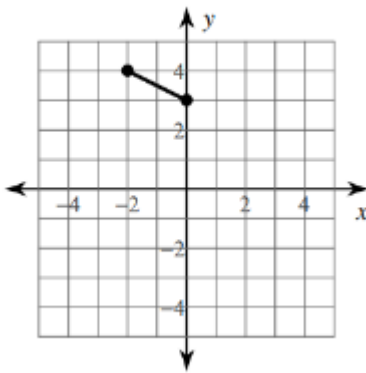
1)



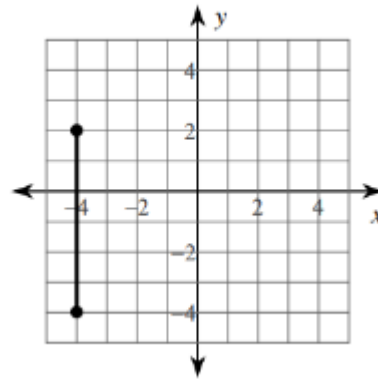
2)



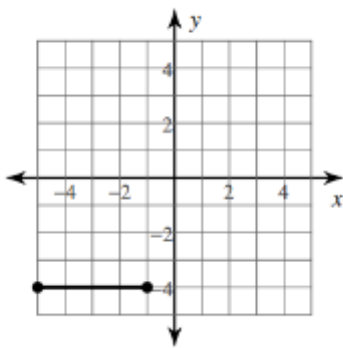
3)



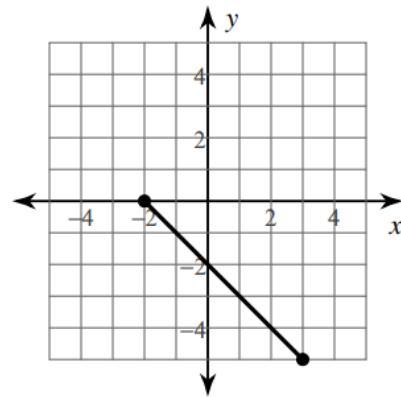
4)



5)



6)



7) $(-2, 3), (-7, -7)$

8) $(2, -9), (-1, 4)$

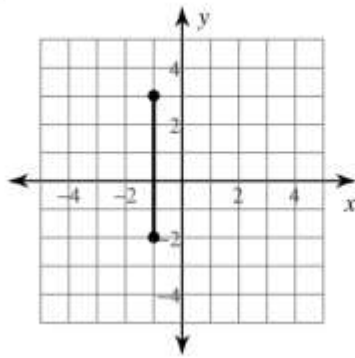
9) $(5, 9), (-7, -7)$

10) $(8, 5), (-1, 3)$

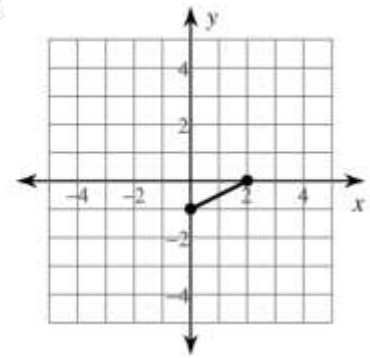
11) $(-10, -7), (-8, 1)$

12) $(-6, -10), (-2, -10)$

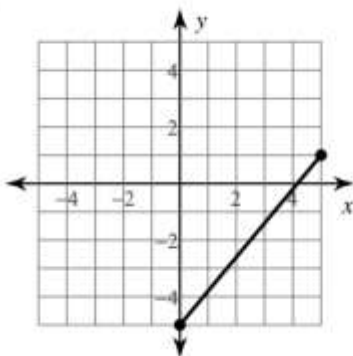
13)



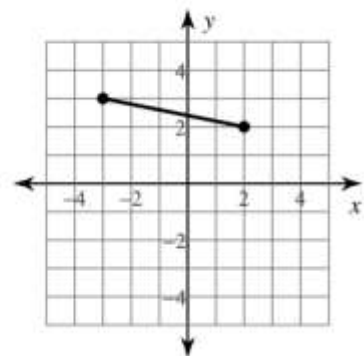
14)



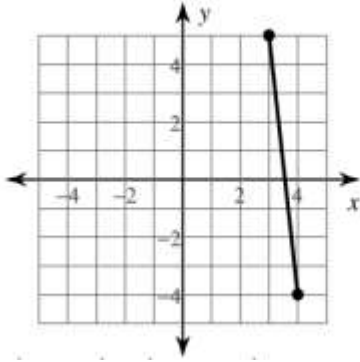
15)



16)



17)

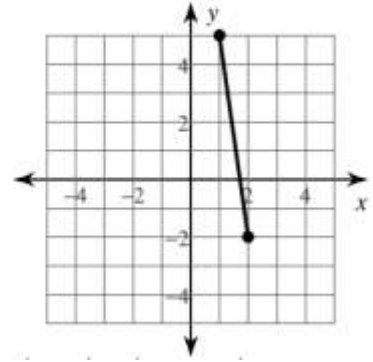


19) $(0, -2), (-5, -1)$

21) $(3, 8), (9, 10)$

23) $(-8, 10), (-6, 7)$

18)



20) $(6, 4), (-5, -1)$

22) $(10, 1), (9, -4)$

24) $(-5, 6), (8, -4)$